



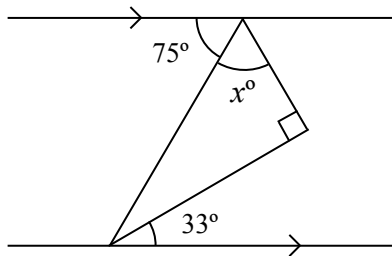
## ANGLE

### ANGLES WITHIN PARALLEL LINES

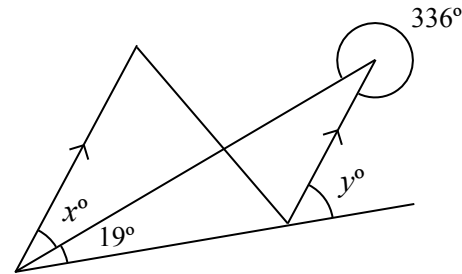
### NO PROTRACTOR

Ref: G421. **3E1**

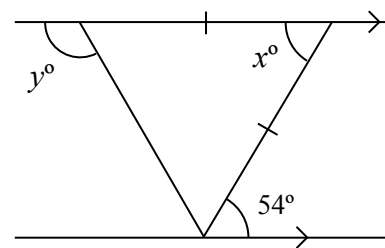
**A1** Find the value of  $x$



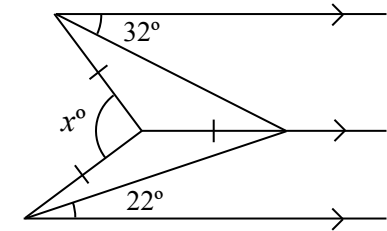
**A2** Find the values of  $x$  and  $y$



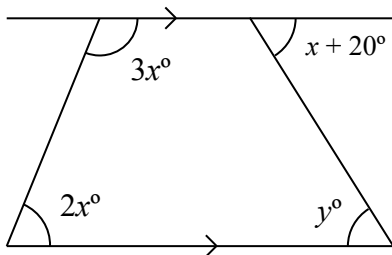
**A3** Find the values of  $x$  and  $y$



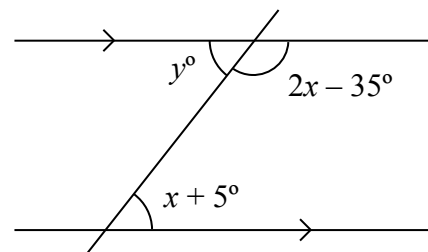
**A4** Find the value of  $x$



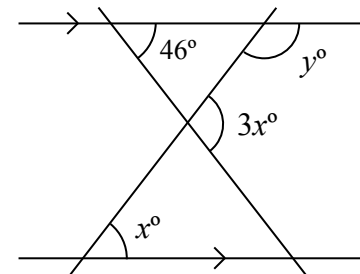
**B1** Find the values of  $x$  and  $y$



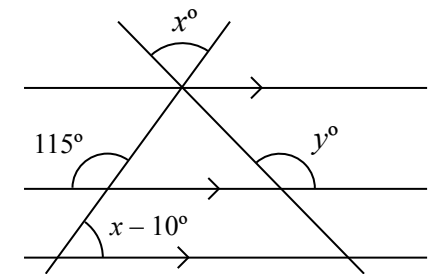
**B2** Find the values of  $x$  and  $y$



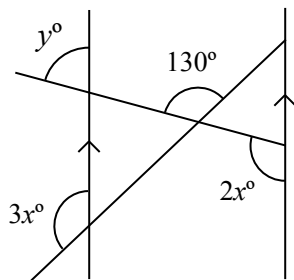
**B3** Find the values of  $x$  and  $y$



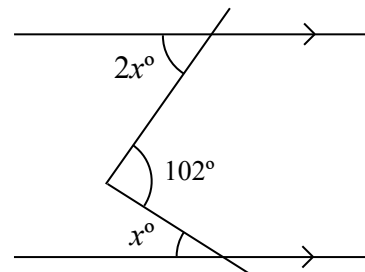
**B4** Find the values of  $x$  and  $y$



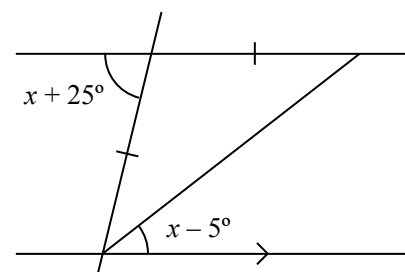
**C1** Find the values of  $x$  and  $y$



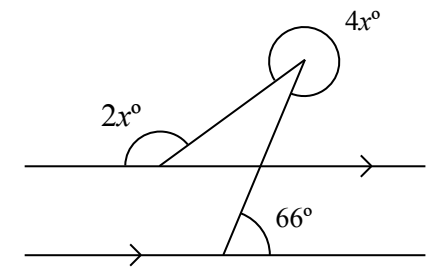
**C2** Find the value of  $x$



**C3** Find the value of  $x$



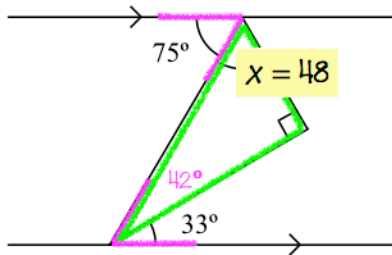
**C4** Find the value of  $x$



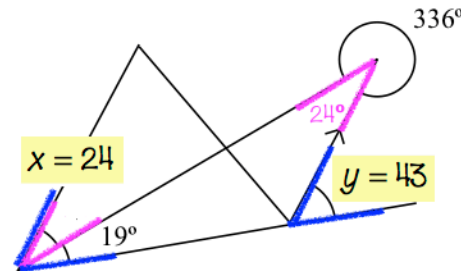


KEY: Corresponding • Alternate • Co-interior • Triangle

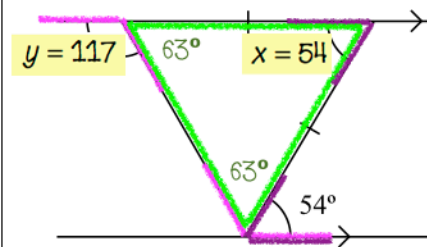
**A1** Find the value of  $x$



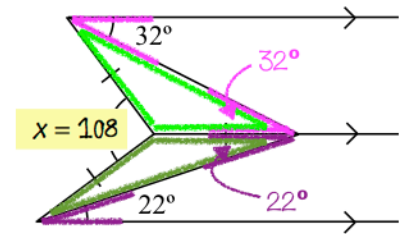
**A2** Find the values of  $x$  and  $y$



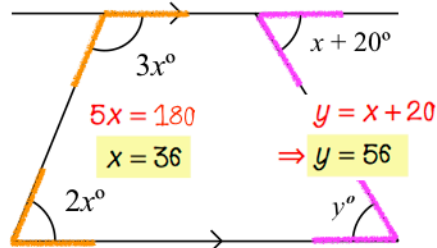
**A3** Find the values of  $x$  and  $y$



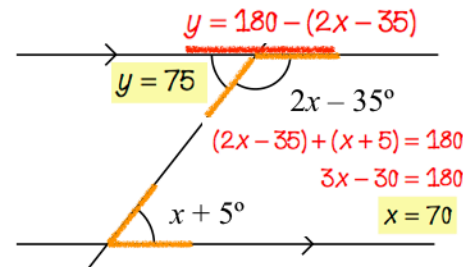
**A4** Find the value of  $x$



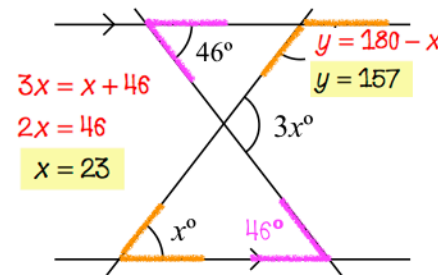
**B1** Find the values of  $x$  and  $y$



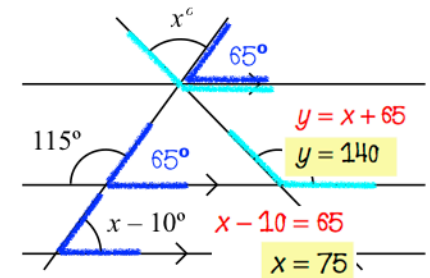
**B2** Find the values of  $x$  and  $y$



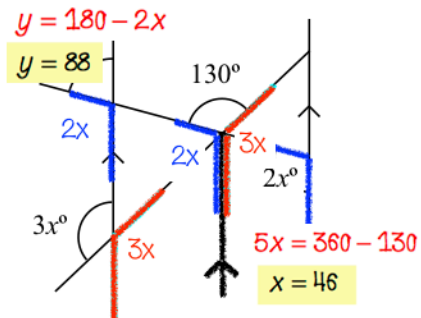
**B3** Find the values of  $x$  and  $y$



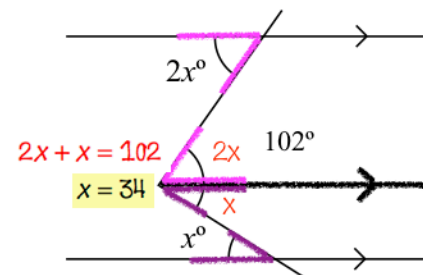
**B4** Find the values of  $x$  and  $y$



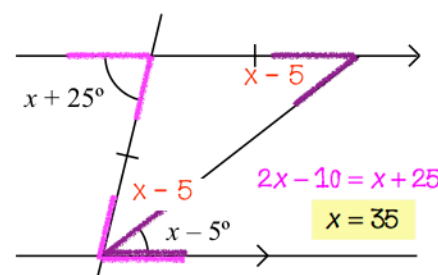
**C1** Find the values of  $x$  and  $y$



**C2** Find the value of  $x$



**C3** Find the value of  $x$



**C4** Find the value of  $x$

